


Year 4 Friday Maths Check Up

Have a go at the questions below. Please don't panic if you find some tricky and please don't ask anyone for help because I would like to see what you can do all by yourself so that I can see what you are confident with and what you are wobbly with. This is so I can work out what you need more help with. Mrs Baker


1 Each box contains 6 eggs.



Complete the fact family to represent the eggs.

	×		=	
	×		=	
	÷		=	
	÷		=	

2 £24 is shared between 6 people.



How much does each person receive?

	÷		=	
--	---	--	---	--

Each person receives £ .

3 Fill in the missing numbers.

a) $4 \times \square \times 2 = 32$

b) $2 \times 7 \times \square = 70$

c) $\square \times 7 \times 5 = 70$

4 Work out the multiplications.

<p>a) $2 \times 4 \times 6 = \square$</p> <p>b) $\square = 8 \times 5 \times 2$</p> <p>c) $4 \times 5 \times 5 = \square$</p>	<p>d) $5 \times 7 \times 3 = \square$</p> <p>e) $\square = 9 \times 2 \times 4$</p> <p>f) $9 \times 2 \times 8 = \square$</p>
--	--

5 Use the 11 and 12 times tables to fill in the missing numbers.

a)

22	33				77			
----	----	--	--	--	----	--	--	--

b)

	36		60		84		
--	----	--	----	--	----	--	--

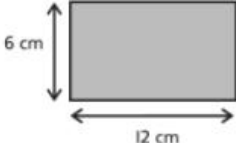
c)

132						60
-----	--	--	--	--	--	----


d)

132						66
-----	--	--	--	--	--	----

6 A rectangle has a length of 12 cm and width of 6 cm.



6 rectangles are used to make a longer rectangle.



CHALLENGE

What is the perimeter of the new shape above?

The perimeter of a shape is the length all the way around the outside.

