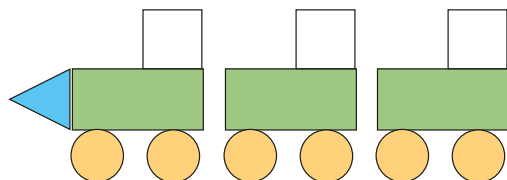


- 1 Some children make a picture using shapes.




- Draw a pictogram to show how many of each shape they have used.
- What do you notice about the number of squares and the number of rectangles?



- 2 There are some animals in a zoo.

- Draw a pictogram to show how many of each animal there are.



- How did you complete the pictogram?  
Compare with a partner.



- 3 Pencils, rubbers and rulers have been mixed up in a tub.

The tally chart shows how many of each item there are.

Item	Tally
pencils	IIII
rubbers	IIII IIII
rulers	IIII I

- Use the tally chart to complete the pictogram.

Item	
Pencils	● ● ● ●
Rubbers	
Rulers	

Key  
● = 1 item



- b) How did you complete the pictogram?  
Compare with a partner.







- 3 Pencils, rubbers and rulers have been mixed up in a tub.


The tally chart shows how many of each item there are.

Item	Tally
pencils	IIII
rubbers	IIII IIII
rulers	IIII I




















- a) Use the tally chart to complete the pictogram.



Item	
Pencils	   
Rubbers	
Rulers	

**Key**  
 = 1 item

- b) Mo draws a pictogram for the same items.  
Here is his pictogram.

Item	
Pencils	   
Rubbers	        
Rulers	     

What mistakes has Mo made?  
How could his pictogram be improved?



- 4 There are some flowers in a garden.
- There are 4 sunflowers.
  - There is 1 less daffodil than there are sunflowers.
  - There are twice as many daisies as daffodils.
  - There is the same number of tulips as daffodils.
- a) Draw a pictogram.
- b) How many flowers are in the garden in total?

