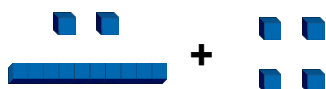


Add by Counting On

1. Match each image to a calculation and complete by counting on.

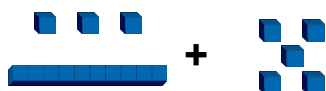
A.



D.

$13 + 5 =$

B.



E.

$12 + 4 =$

C.



F.

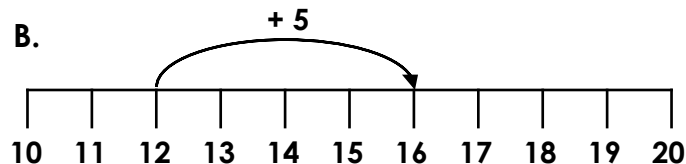
$11 + 6 =$

2. Which representation is incorrect?

A.

18	
11	7

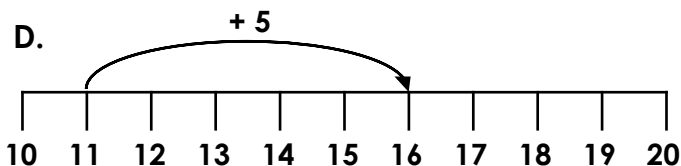
B.



C.

17	
14	3

D.



3. Beth and Sam are playing a board game. Use the number line to work out who is in the lead. Explain your answer.



Beth

I was on 9.
I have rolled a 5.



Sam

I was on 7.
I have rolled a 6.

